


Name: \_\_\_\_\_ Datum: \_\_\_\_\_ Klasse: \_\_\_\_\_

## Zerlegen der 9

1)      
 $9 = 3 + \underline{\quad}$   $9 = 7 + \underline{\quad}$

2)      
 $9 = \underline{\quad} + \underline{\quad}$   $9 = \underline{\quad} + \underline{\quad}$

3)      
 $9 = \underline{\quad} + \underline{\quad}$   $9 = \underline{\quad} + \underline{\quad}$







4)      
 $3 + \underline{\quad} = 9$   $4 + \underline{\quad} = 9$

5)     
 $0 + \underline{\quad} = 9$   $\underline{\quad} + \underline{\quad} = 9$

6)      
 $\underline{\quad} + \underline{\quad} = 9$   $\underline{\quad} + \underline{\quad} = 9$

7)      
 $\underline{\quad} + 6 = 9$   $\underline{\quad} + 5 = 9$

8)        
 $\underline{\quad} + \underline{\quad} + \underline{\quad} = 9$   $\underline{\quad} + \underline{\quad} + \underline{\quad} = 9$

9)        
 $\underline{\quad} + \underline{\quad} + \underline{\quad} = 9$   $\underline{\quad} + \underline{\quad} + \underline{\quad} = 9$

10)        
 $\underline{\quad} + \underline{\quad} + \underline{\quad} = 9$   $\underline{\quad} + \underline{\quad} + \underline{\quad} = 9$