























Name: \_\_\_\_\_ Datum: \_\_\_\_\_ Klasse: \_\_\_\_\_

### Minusaufgaben bis 10 / Übung 4

- 1)    $7 - 4 = \underline{\quad}$     $6 - 3 = \underline{\quad}$
- 2)   $9 - 2 = \underline{\quad}$    $5 - 2 = \underline{\quad}$
- 3)   $8 - 3 = \underline{\quad}$    $10 - 1 = \underline{\quad}$
- 4)   $9 - \underline{\quad} = 5$    $7 - \underline{\quad} = 5$
- 5)   $5 - \underline{\quad} = 1$    $8 - \underline{\quad} = 5$
- 6)   $10 - \underline{\quad} = 5$    $6 - \underline{\quad} = 2$
- 7)   $\underline{\quad} - \underline{\quad} = 3$    $\underline{\quad} - \underline{\quad} = 1$
- 8)   $\underline{\quad} - \underline{\quad} = 5$    $\underline{\quad} - \underline{\quad} = 4$
- 9)   $\underline{\quad} - \underline{\quad} = 6$    $\underline{\quad} - \underline{\quad} = 2$
- 10)   $10 - 2 - \underline{\quad} = 3$    $10 - 3 - \underline{\quad} = 4$